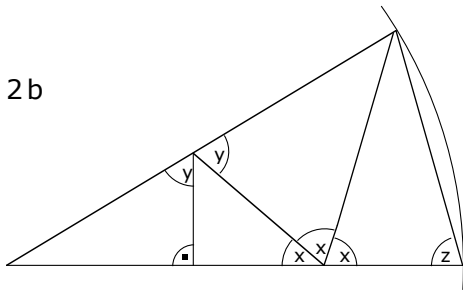
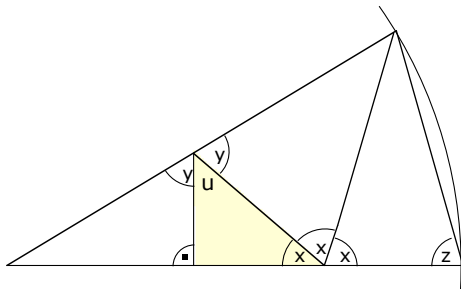


2b



$$3 \cdot x = 180^\circ \Rightarrow x = 60$$



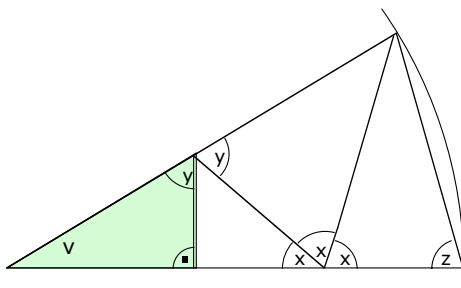
Das gelbe Dreieck ist rechtwinklig:
 $u = 90^\circ - x = 90^\circ - 60^\circ = 30^\circ$

Damit ergibt sich:

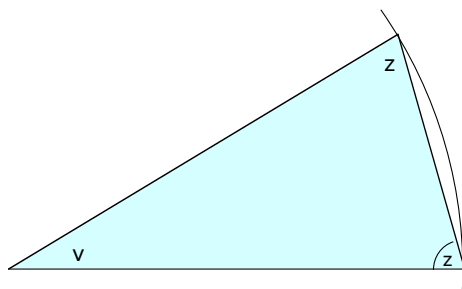
$$2y + u = 180^\circ$$

$$2y = 180^\circ - u = 180^\circ - 30^\circ = 150^\circ$$

$$y = 75^\circ$$



Das grüne Dreieck ist rechtwinklig:
 $v = 90^\circ - y = 90^\circ - 75^\circ = 15^\circ$



Das blaue Dreieck ist gleichschenkelig:
 (Bogen beachten!)

$$2z + v = 180^\circ$$

$$2z = 180^\circ - v = 180^\circ - 15^\circ = 165^\circ$$

$$z = 82.5^\circ$$