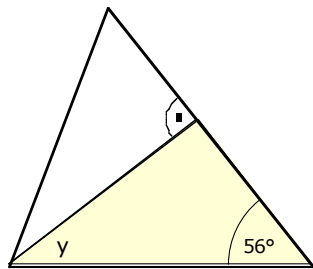
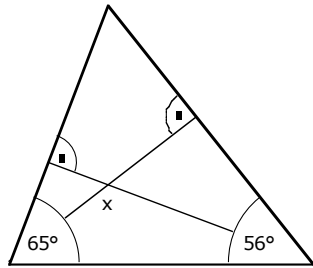
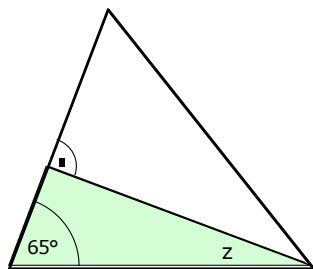


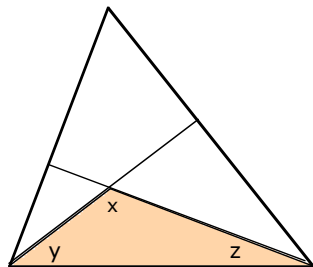
2 a



Das gelbe Dreieck ist rechtwinklig:
 $y = 90^\circ - 56^\circ = 34^\circ$



Das grüne Dreieck ist rechtwinklig:
 $z = 90^\circ - 65^\circ = 25^\circ$



Im roten Dreieck gilt:
 $x = 180^\circ - y - z = 180^\circ - 34^\circ - 25^\circ = 121^\circ$